

Constable (GD) in CAPFs, NIA, SSF and Rifleman (GD) in Assam Rifles Examination, 2018

Roll No. :	www.exammix.com
Registration No.	Exammix
Name :	
Exam Venue :	
Exam Time :	12:30 PM - 2:00 PM
Exam Date :	11/02/2019

Section : General Section

Q.1 Identify the correct option to complete the following series.

5, 8, 13, 20, 29, _____, 53, 68, 85

- Ans
- 1. 40
 - 2. 39
 - 3. 35
 - 4. 36

Question ID : 9895802463
Chosen Option : 1

Q.2 Identify the number that is different from the rest.

- Ans
- 1. 625
 - 2. 115
 - 3. 125
 - 4. 25

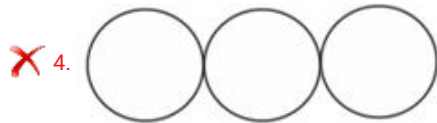

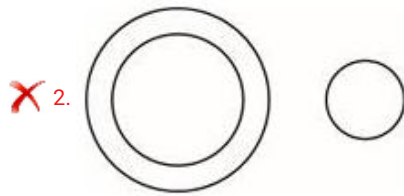
Question ID : 9895802465
Chosen Option : 2

Q.3 Select the Venn diagram that best illustrates the relationship between the three given classes.

Languages, Hindi, Malayalam

Ans





Question ID : 9895802473
Chosen Option : 3

Q.4 A medical representative plans to visit each of six hospitals — A, B, C, D, E and F — exactly once during the course of one day. He is setting up his schedule for the day according to the following conditions:

- i. He must visit A before B and E.
- ii. He must visit B before D.
- iii. The third hospital he visits must be C.

Which of the following could be the order in which the medical representative visits the six hospitals?

- Ans**
- ✗ 1. A, F, C, D, E, B
 - ✗ 2. C, E, A, B, D, F
 - ✗ 3. C, F, A, E, D, B
 - ✓ 4. A, B, C, D, E, F

Question ID : 9895802458
Chosen Option : 2

Q.5 Read the given statements and conclusions carefully. Assuming that the information given in the statements is true, even if they appear to be at variance with commonly known facts, decide which of the conclusions logically follow(s) from the statements beyond reasonable doubt.

Statements:

- No cat is a monkey.
- No monkey is a cow.

Conclusions:

- I. No cat is a cow.
- II. Some cows are monkeys.

- Ans** ✗ 1. Only conclusion I follows.

- 2. Only conclusion II follows.
- 3. Neither conclusion I nor conclusion II follows.
- 4. Both conclusions I and II follow.

Question ID : 9895802460
Chosen Option : 2

Q.6 Select the option that is related to the third term in the same way as the second term is related to the first term.

ACE : EIM :: DFH : ?

- Ans
- 1. PLH
 - 2. HPL
 - 3. PHL
 - 4. HLP

Question ID : 9895802453
Chosen Option : 4

Q.7 Select the option in which the given figure is embedded.



Ans

- 1.
- 2.
- 3.
- 4.

Question ID : 9895802469
Chosen Option : 1

Q.8

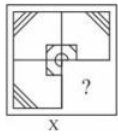
Identify the correct option to complete the following series.

50, 49, 47, 44, 40, 35, _____, 22

- Ans
- 1. 30
 - 2. 27
 - 3. 29
 - 4. 25

Question ID : 9895802462
Chosen Option : 3

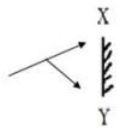
Q.9 Select a figure from amongst the four alternatives, that when placed in the blank space (?) of figure X will complete the pattern. (Rotation is not allowed).



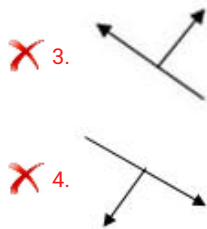
- Ans
- 1.
 - 2.
 - 3.
 - 4.

Question ID : 9895802470
Chosen Option : 2

Q.1 Choose the alternative which most closely resembles the mirror image of the given figure when mirror is placed at right side.



- Ans
- 1.
 - 2.



Question ID : 9895802471
Chosen Option : 1

Q.1
1 If KITCHEN is coded as LKWGMKU, then SHAMPOO will be coded as _____.

- Ans
- 1. TJDQUUV
 - 2. TJDQTUU
 - 3. TJDQTUV
 - 4. TJEQUUV

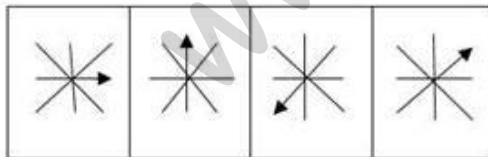
Question ID : 9895802456
Chosen Option : 3

Q.1
2 Identify the odd pair from the following.

- Ans
- 1. Eagle : Swoop
 - 2. Pig : Sty
 - 3. King : Palace
 - 4. Bird : Nest

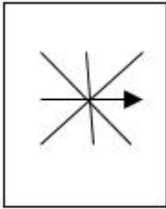
Question ID : 9895802452
Chosen Option : 2

Q.1
3 Select the figure that will come next in the following series.

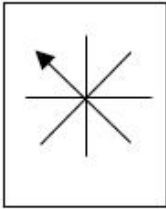


- Ans
- 1.

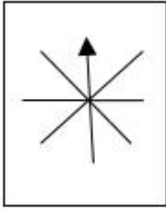
2.



3.



4.



Question ID : 9895802468
Chosen Option : 1

Q.1 In the following number series, two numbers have been put within brackets. Study the series carefully and select the correct alternative with respect to the series.
4

3, 9, (27), 81, (243), 729, 2187

Ans 1.

The first bracketed number (from the left) is correct and the second is incorrect.

- 2. Both the bracketed numbers are correct.
- 3. Both the bracketed numbers are incorrect.
- 4.

The first bracketed number (from the left) is incorrect and the second is correct.

Question ID : 9895802467
Chosen Option : 1

Q.1 'Athletics' is related to 'Stadium' in the same way as 'Skating' is related to '_____'.
5

- Ans 1. Ground
 2. Track
 3. Rink
 4. Court

Question ID : 9895802454
Chosen Option : 3

Q.1 Seven employees, T, U, V, W, X, Y and Z, reach their factory in a particular sequence. Y reaches immediately before T but does not immediately follow W. V is the last one to reach. X immediately follows T and is subsequently followed by Z. W reaches before T. Who is the second to reach the factory?
6

Ans 1. U

- 2. X
- 3. W
- 4. Z

Question ID : 9895802459
Chosen Option : 2

Q.1
7 If B = 3 and H = 9, then SCHOOL = _____.

- Ans
- 1. 78
 - 2. 76
 - 3. 69
 - 4. 96

Question ID : 9895802455
Chosen Option : 3

Q.1
8 Identify the odd one from the following.

- Ans
- 1. Volume
 - 2. Small
 - 3. Height
 - 4. Weight

Question ID : 9895802450
Chosen Option : 1

Q.1
9 A square transparent sheet with a pattern is given. How will the pattern appear when the transparent sheet is folded along the dotted line?



Ans

- 1.
- 2.
- 3.
- 4.

Question ID : 9895802472
Chosen Option : 2

Q.2
0 Identify the odd one from the following.

- Ans
- 1. EV
 - 2. KP
 - 3. DX
 - 4. HS

Question ID : 9895802451
Chosen Option : 2

Q.2
1 Six students are sitting in a row. Akbar is to the left of the person sitting in the middle, but to the right of Sekar. Prakash is to the right of Deva, and Ram is to the right of Prakash. Ram is second from the person sitting in the middle. Who is the person sitting in the middle?

- Ans
- 1. Sekar
 - 2. Akbar
 - 3. Deva
 - 4. Ram

Question ID : 9895802457
Chosen Option : 3

Q.2
2 The statements below are followed by two conclusions labeled I and II. Assuming that the information in the statements is true, even if it appears at variance with generally established facts, decide which conclusion(s) logically and definitely follow(s) from the information given in the statements.

Statements:

All papers are books.

All books are papaya.

Conclusion

- I. All papers are papaya.
- II. Some papayas are papers.

- Ans
- 1. Only conclusion I follows.
 - 2. Neither conclusion I nor conclusion II follows.
 - 3. Only conclusion II follows.
 - 4. Both conclusions I and II follow.

Question ID : 9895802461
Chosen Option : 4

Q.2
3 Which two signs need to be interchanged to make the given equation correct?

$$20 \div 20 + 20 - 20 \times 20 = 20$$

- Ans
- 1. + and ÷
 - 2. + and -
 - 3. ÷ and ×
 - 4. + and ×

Question ID : 9895802466
Chosen Option : 3

Q.2
4 Select the term that will come next in the following series.

a, cd, fgh, jklm, opqrs, _____

- Ans
- 1. uvwxyz
 - 2. vwxyza
 - 3. uvwxy
 - 4. tuvwxxy

Question ID : 9895802449
Chosen Option : 4

Q.2
5 Select the option that is related to the third term in the same way as the second term is related to the first term.

$\frac{1}{6} : 121 :: \frac{8}{9} : \underline{\hspace{2cm}}$

- Ans
- 1. 145
 - 2. 300
 - 3. 289
 - 4. 356

Question ID : 9895802464
Chosen Option : 4

Q.2
6 The directional growth movement in plants due to touch is called _____.

- Ans
- 1. thigmonasty
 - 2. geotropism
 - 3. phototropism
 - 4. chemotropism

Question ID : 9895803027
Chosen Option : 2

Q.2
7 The deltas of the Mahanadi and the Godavari are rich in _____ soil.

- Ans
- 1. black
 - 2. arid
 - 3. forest

4. alluvial

Question ID : 9895803009
Chosen Option : 4

Q.2
8 A person with the blood group _____ is considered to be a universal donor.

- Ans 1. O negative
 2. AB positive
 3. AB negative
 4. O positive

Question ID : 9895803024
Chosen Option : 4

Q.2
9 When was the Planning Commission set up?

- Ans 1. 2019
 2. 2000
 3. 1947
 4. 1950

Question ID : 9895803013
Chosen Option : 4

Q.3
0 The three-tier system of local government does NOT include the _____.

- Ans 1. Panchayat Samiti
 2. Village Committee
 3. Gram Panchayat
 4. Zila Parishad

Question ID : 9895803017
Chosen Option : 3

Q.3
1 The United States of America adopted a democratic constitution in _____.

- Ans 1. 1932
 2. 1787
 3. 1877
 4. 2000

Question ID : 9895803016
Chosen Option : 1

Q.3
2 In which battle Napoleon was defeated?

- Ans 1. Ligny

- 2. Jena
- 3. Waterloo
- 4. Arcole

Question ID : 9895803003
Chosen Option : 3

Q.3
3 Which of the following is the hardest substance?

- Ans
- 1. Coal
 - 2. Diamond
 - 3. Silver
 - 4. Iron

Question ID : 9895803010
Chosen Option : 2

Q.3
4 The Statue of Unity in India is the world's tallest statue of _____.

- Ans
- 1. M.K Gandhi
 - 2. Sardar Vallabhbhai Patel
 - 3. Vinoba Bhave
 - 4. Dr B.R Ambedkar

Question ID : 9895803019
Chosen Option : 2

Q.3
5 Begum Hazrat Mahal is associated to which of the following revolts of India?

- Ans
- 1. Moplah Revolt 1921
 - 2. Paik Revolt 1817
 - 3. Gond Revolt 1941
 - 4. Sepoy Mutiny 1857

Question ID : 9895803004
Chosen Option : 3

Q.3
6 The National Rural Employment Guarantee Act was passed in _____.

- Ans
- 1. 2005
 - 2. 1900
 - 3. 2019
 - 4. 2000

Question ID : 9895803012
Chosen Option : 1

Q.3
7 Name the famous Indian cricketer who wrote the book 'A Century Is Not Enough'.

- Ans
- 1. Virender Sehwag
 - 2. Virat Kohli
 - 3. Sachin Tendulkar
 - 4. Sourav Ganguly

Question ID : 9895803006
Chosen Option : 4

Q.3
8 _____ won the Miss World 2017 pageant.

- Ans
- 1. Lara Dutta
 - 2. Anukreethy
 - 3. Manushi Chillar
 - 4. Yukta Mukhi

Question ID : 9895803023
Chosen Option : 3

Q.3
9 _____ is a dance form which represents a unique synthesis of Hindu and Muslim genius in art.

- Ans
- 1. Kathak
 - 2. Manipuri
 - 3. Odissi
 - 4. Kathkali

Question ID : 9895803018
Chosen Option : 2

Q.4
0 The smallest living bird is the _____.

- Ans
- 1. hummingbird
 - 2. canary
 - 3. house sparrow
 - 4. dove

Question ID : 9895803025
Chosen Option : 1

Q.4
1 The largest backwater lake in Odisha is _____.

- Ans
- 1. Dal lake
 - 2. Wular lake
 - 3. Chilika lake
 - 4. Pulicat lake

Question ID : 9895803011
Chosen Option : 3

Q.4
2 In India, currency notes of ₹ 500 and ₹ 1,000 were declared invalid in the year?

- Ans
- 1. 1998
 - 2. 2019
 - 3. 2016
 - 4. 2001

Question ID : 9895803014
Chosen Option : 3

Q.4
3 The first lady Indian Air Force officer to fly MIG 21 is _____.

- Ans
- 1. Khusboo Mehta
 - 2. Bhavna Sharma
 - 3. Anjali Gupta
 - 4. Avani Chaturvedi

Question ID : 9895803022
Chosen Option : 3

Q.4
4 Which of the following is NOT a multicellular animal?

- Ans
- 1. Amoeba
 - 2. Cat
 - 3. Human
 - 4. Horse

Question ID : 9895803026
Chosen Option : 1

Q.4
5 Prithvi Raj Chauhan was defeated at the hands of _____, in the battle of Tarain, 1192.

- Ans
- 1. Mohammad Ghori
 - 2. Harun Al Rashid
 - 3. Abu Bakr
 - 4. Umar II

Question ID : 9895803005
Chosen Option : 1

Q.4
6 Which state has the largest coast line?

- Ans
- 1. Karnataka
 - 2. Kerala
 - 3. Tamil Nadu
 - 4. Gujarat

Question ID : 9895803008

Chosen Option : 4

Q.4 The All-India War Memorial, built in the memory of the Indian soldiers who laid down their lives in the First World War, is known today as _____.

- Ans
- 1. Char Minar
 - 2. Lal Qila
 - 3. Jama Masjid
 - 4. India Gate

Question ID : 9895803020
Chosen Option : 4

Q.4 Which Hindi movie is based on the Indian hockey team on their first Olympic gold since India became independent?

- Ans
- 1. Lagaan
 - 2. MS Dhoni
 - 3. Gold
 - 4. Chak De

Question ID : 9895803007
Chosen Option : 4

Q.4 Identify the author of the book "Straight from the heart"

- Ans
- 1. Sachin Tendulkar
 - 2. Kapil Dev
 - 3. M.S. Dhoni
 - 4. Saurav Ganguly

Question ID : 9895803021
Chosen Option : 2

Q.5 Which country gave universal suffrage since the 19th century?

- Ans
- 1. Sri Lanka
 - 2. India
 - 3. Pakistan
 - 4. New Zealand

Question ID : 9895803015
Chosen Option : 2

Q.5 A person purchased 12 bags of sugar at the rate of ₹ 1200 per bag, 8 bags at the rate of ₹ 1500 per bag and 10 bags at the rate of ₹ 2100 per bags. What will be the average cost of all the bags together?

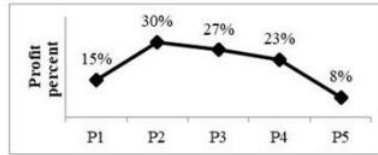
- Ans
- 1. ₹ 1420
 - 2. ₹ 1680
 - 3. ₹ 1580

4. ₹ 1640

Question ID : 9895804134
Chosen Option : 3

Q.5 The line chart given below shows the profit percentage of a company on 5 different products P1, P2, P3, P4 and P5.

2



The expenditure of product P5 is ₹ 46000. What is revenue of product P5?

- Ans 1. ₹ 52780
 2. ₹ 9680
 3. ₹ 47360
 4. ₹ 4600

Question ID : 9895804153
Chosen Option : 4

Q.5 A bowler has taken 0, 3, 2, 1, 5, 3, 4, 5, 5, 2, 2, 0, 0, 1 and 2 wickets in 15 consecutive matches.

3

What is the median of the given data?

- Ans 1. 1
 2. 3
 3. 0
 4. 2

Question ID : 9895804137
Chosen Option : 3

Q.5 A sum of ₹ 9800 gives simple interest of ₹ 4704 in 6 years. What will be the rate of interest per annum?

4

- Ans 1. 9%
 2. 8.5%
 3. 8%
 4. 7.5%

Question ID : 9895804144
Chosen Option : 4

Q.5 What is the value of $7\frac{1}{4} + [6 + (5 - 8 \div 4) - 1]$?

- Ans 1. $\frac{61}{4}$
 2. $\frac{29}{2}$

3. $\frac{23}{2}$

4. $\frac{57}{4}$

Question ID : 9895804133
Chosen Option : 2

Q.5 If Rohit can cover a distance of 1188 km in 22 hours, then what is the speed of Rohit?
6

- Ans 1. 54 m/s
 2. 25 m/s
 3. 15 m/s
 4. 48 m/s

Question ID : 9895804149
Chosen Option : 1

Q.5 The average weight of a group of 24 students increases by 2 kg when the weight of teacher is also included. If the initial
7 average weight of the group of 24 students was 30 kg, then what is the weight of teacher?

- Ans 1. 32 kg
 2. 82 kg
 3. 80 kg
 4. 92 kg

Question ID : 9895804135
Chosen Option : 1

Q.5 Selling price and cost price of an article are ₹ 1333 and ₹ 2150. What will be the loss percentage?
8

- Ans 1. 38%
 2. 61.30%
 3. 48%
 4. 54.4%

Question ID : 9895804139
Chosen Option : 1

Q.5 If the diameter of a circle increases by 15%, then what will be the percentage increase in its area?
9

- Ans 1. 35.75%
 2. 30.3%
 3. 25%
 4. 32.25%

Question ID : 9895804151
Chosen Option : 1

Q.6 Mohit goes to his office at the speed of 10 m/s and returns to his home at the speed of x km/hr. If average speed of Mohit for the whole journey is 12 m/s, then what is the value of x ?

- Ans
- 1. 25 km/hr
 - 2. 15 km/hr
 - 3. 36 km/hr
 - 4. 54 km/hr

Question ID : 9895804148
Chosen Option : 3

Q.6 If $A : B = 7 : 8$ and $B : C = 7 : 9$, then what is the ratio of $A : B : C$?

- Ans
- 1. 56 : 49 : 72
 - 2. 49 : 56 : 72
 - 3. 56 : 72 : 49
 - 4. 72 : 56 : 49

Question ID : 9895804142
Chosen Option : 1

Q.6 Rohit multiplies a number by 2 instead of dividing the number by 2. Resultant number is what percentage of the correct value?

- Ans
- 1. 200%
 - 2. 300%
 - 3. 50%
 - 4. 400%

Question ID : 9895804138
Chosen Option : 4

Q.6 The perimeter of a square and a circle are same. If the area of the circle is 1386 cm^2 , then what will be the area of the square?

- Ans
- 1. 1089 cm^2
 - 2. 841 cm^2
 - 3. 1024 cm^2
 - 4. 1225 cm^2

Question ID : 9895804150
Chosen Option : 2

Q.6 Rohan purchased tables at the rate of ₹ 275 per table. If he sells 16 tables for ₹ 5060, then what will be the profit percentage?

- Ans
- 1. 13.04%
 - 2. 16%
 - 3. 15%
 - 4. 12.5%

Question ID : 9895804140
Chosen Option : 3

Q.6 If Highest common Factor of two numbers is 8, then which of the following cannot be their Least Common Multiple?
5

- Ans
- 1. 72
 - 2. 24
 - 3. 68
 - 4. 48

Question ID : 9895804131
Chosen Option : 4

Q.6 P and Q together can complete a work in 105 days, Q and R together can complete the same work in 90 days, P and R together can complete the same work in 126 days. In how many days P, Q and R together can complete the same work?
6

- Ans
- 1. 70 days
 - 2. 74 days
 - 3. 76 days
 - 4. 72 days

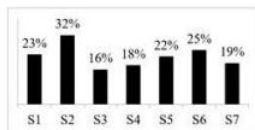
Question ID : 9895804146
Chosen Option : 2

Q.6 A alone can complete a work in 14 days and B alone can complete the same work in 21 days. A and B start the work together but A leaves the work after 4 days of the starting of work. In how many days B will complete the remaining work?
7

- Ans
- 1. 9 days
 - 2. 16 days
 - 3. 12 days
 - 4. 11 days

Question ID : 9895804147
Chosen Option : 1

Q.6 The bar chart given below shows the amount of sugar used in making 7 different varieties of sweets S1, S2, S3, S4, S5, S6 and S7 has been shown as a percentage of total weight of the sweet.
8



The combined weight of sweet S5 and S3 is 300 kg. What is the total amount of sugar used in these two sweets together?

- Ans
- 1. Cannot be determined
 - 2. 54 kg
 - 3. 57 kg
 - 4. 60 kg

Question ID : 9895804154

Chosen Option : 4

Q.6 The marked price of a chair and a table are in the ratio 2:3 respectively. The shopkeeper gives 20% discount on the chair. If the combined discount on both the chair and the table is 26%, then what will be the discount given on the table?

- Ans
- 1. 34%
 - 2. 32%
 - 3. 30%
 - 4. 28%

Question ID : 9895804136

Chosen Option : 3

Q.7 In a Company, number of engineers doubles itself in every 2 years. In how much time will the number of engineers become 1024 times of its original number?

- Ans
- 1. 12 years
 - 2. 20 years
 - 3. 15 years
 - 4. 24 years

Question ID : 9895804145

Chosen Option : 2

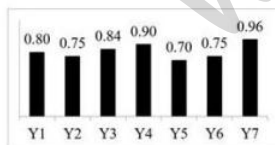
Q.7 $A : B = 5 : 8$ and $B : C = 11 : 13$. If $A = 110$, then what is the value of C ?

- Ans
- 1. 176
 - 2. 104
 - 3. 208
 - 4. 88

Question ID : 9895804143

Chosen Option : 2

Q.7 The bar chart given below shows the ratio of expenditure to revenue for seven consecutive years Y1, Y2, Y3, Y4, Y5, Y6 and Y7.



In which year is the profit highest?

- Ans
- 1. Y5
 - 2. Y6
 - 3. Cannot be determined
 - 4. Y2

Question ID : 9895804155

Chosen Option : 2

Q.7
3 If the side of a square increases by 20%, then what will be percent increase in its perimeter?

- Ans
- 1. 44%
 - 2. 20%
 - 3. 80%
 - 4. 40%

Question ID : 9895804152
Chosen Option : 4

Q.7
4 If P : Q : R = 5 : 3 : 6, then what will be the ratio of (P/Q) : (Q/R) : (R/P)?

- Ans
- 1. 50 : 15 : 36
 - 2. 50 : 45 : 36
 - 3. 75 : 15 : 36
 - 4. 40 : 12 : 27

Question ID : 9895804141
Chosen Option : 3

Q.7
5 What is the value of $\left(\frac{5}{2} \text{ of } 5 \div 4 - 2 \text{ of } \frac{1}{7} \div \frac{1}{7}\right)$?

- Ans
- 1. $\frac{13}{8}$
 - 2. $\frac{23}{18}$
 - 3. $\frac{17}{16}$
 - 4. $\frac{9}{8}$

Question ID : 9895804132
Chosen Option : 3

Section : English Language

Q.1 Select the word which means the same as the group of words given.

A disease that is prevalent in a particular area

- Ans
- 1. Genetic
 - 2. Contagious
 - 3. Endemic
 - 4. Viral

Question ID : 9895803694
Chosen Option : 4

Q.2 Select the correctly spelt word.

- Ans
- 1. Changeble
 - 2. Changable
 - 3. Chageable
 - 4. Changeable

Question ID : 9895803697
Chosen Option : 2

Q.3 Select the word which means the same as the group of words given.

One who studies and cares about environment

- Ans
- 1. Archeologist
 - 2. Ecologist
 - 3. Anthropologist
 - 4. Biologist

Question ID : 9895803695
Chosen Option : 2

Q.4 Select the most appropriate word to fill in the blank.

The Prime Minister was as good as his _____.

- Ans
- 1. word
 - 2. office
 - 3. sword
 - 4. dress

Question ID : 9895803680
Chosen Option : 2

Q.5 Select the most appropriate word to fill in the blank.

While in Rome we must do as Romans _____.

- Ans
- 1. is doing
 - 2. was doing
 - 3. had done
 - 4. do

Question ID : 9895803678
Chosen Option : 2

Q.6

Select the most appropriate word to fill in the blank.

They never _____ those who have done wrong.

- Ans
- 1. condemn
 - 2. outcast
 - 3. blame
 - 4. forgive

Question ID : 9895803681
Chosen Option : 4

Comprehension:

In the following passage some words have been deleted. Fill in the blanks with the help of the alternatives given.

Every day for a whole year, all kinds of holy men, hermits, scholars and nobles came, and related to the priests their deeds of __ (1) _____, and the priests in solemn council heard their claims. At last, they decided that the one who seemed to be the greatest lover of (2) _____ was a rich man who had that very year given all his (3) _____ to the poor. So they gave him the plate of gold, but when he took it in his hand, it turned into (4) _____ lead; though, when he dropped it on the floor, to his (5) _____, it became gold again.

SubQuestion No : 7

Q.7 Select the most appropriate option that will fill in the blank number 1.

- Ans
- 1. charity
 - 2. kindness
 - 3. happiness
 - 4. sympathy

Question ID : 9895803683
Chosen Option : 3

Comprehension:

In the following passage some words have been deleted. Fill in the blanks with the help of the alternatives given.

Every day for a whole year, all kinds of holy men, hermits, scholars and nobles came, and related to the priests their deeds of (1) _____, and the priests in solemn council heard their claims. At last, they decided that the one who seemed to be the greatest lover of (2) _____ was a rich man who had that very year given all his (3) _____ to the poor. So they gave him the plate of gold, but when he took it in his hand, it turned into (4) _____ lead; though, when he dropped it on the floor, to his (5) _____, it became gold again.

SubQuestion No : 8

Q.8 Select the most appropriate option that will fill in the blank number 2.

- Ans
- 1. destitute
 - 2. moneyless
 - 3. mankind
 - 4. women

Question ID : 9895803684
Chosen Option : 3

Comprehension:

In the following passage some words have been deleted. Fill in the blanks with the help of the alternatives given.

Every day for a whole year, all kinds of holy men, hermits, scholars and nobles came, and related to the priests their deeds of (1) _____, and the priests in solemn council heard their claims. At last, they decided that the one who seemed to be the greatest lover of (2) _____ was a rich man who had that very year given all his (3) _____ to the poor. So they gave him the plate of gold, but when he took it in his hand, it turned into (4) _____ lead; though, when he dropped it on the floor, to his (5) _____, it became gold again.

SubQuestion No : 9

Q.9 Select the most appropriate option that will fill in the blank number 3.

- Ans
- 1. wealth
 - 2. energy
 - 3. time
 - 4. life

Question ID : 9895803685
Chosen Option : 3

Comprehension:

In the following passage some words have been deleted. Fill in the blanks with the help of the alternatives given.

Every day for a whole year, all kinds of holy men, hermits, scholars and nobles came, and related to the priests their deeds of __ (1) _____, and the priests in solemn council heard their claims. At last, they decided that the one who seemed to be the greatest lover of (2) _____ was a rich man who had that very year given all his (3) _____ to the poor. So they gave him the plate of gold, but when he took it in his hand, it turned into (4) _____ lead; though, when he dropped it on the floor, to his (5) _____, it became gold again.

SubQuestion No : 10

Q.1
0 Select the most appropriate option that will fill in the blank number 4.

- Ans
- 1. gold
 - 2. worthy
 - 3. worthless
 - 4. valuable

Question ID : 9895803686

Chosen Option : 2

Comprehension:

In the following passage some words have been deleted. Fill in the blanks with the help of the alternatives given.

Every day for a whole year, all kinds of holy men, hermits, scholars and nobles came, and related to the priests their deeds of __ (1) _____, and the priests in solemn council heard their claims. At last, they decided that the one who seemed to be the greatest lover of (2) _____ was a rich man who had that very year given all his (3) _____ to the poor. So they gave him the plate of gold, but when he took it in his hand, it turned into (4) _____ lead; though, when he dropped it on the floor, to his (5) _____, it became gold again.

SubQuestion No : 11

Q.1
1 Select the most appropriate option that will fill in the blank number 5.

- Ans
- 1. confusion
 - 2. happiness
 - 3. admiration
 - 4. amazement

Question ID : 9895803687

Chosen Option : 2

Q.1
2 Select the antonym of the given word.

HORIZONTAL

- Ans
- 1. Parallel
 - 2. Financial
 - 3. Official
 - 4. Vertical

Question ID : 9895803689
Chosen Option : 1

Q.1
3 From the given options, identify the segment in the sentence which contains the grammatical error.

Does he like to go for sightseeing when he is in holiday?

- Ans
- 1. when he is
 - 2. Does he like
 - 3. in holiday?
 - 4. to go for sightseeing

Question ID : 9895803672
Chosen Option : 3

Q.1
4 Select the option that means the same as the given idiom.

In a nutshell

- Ans
- 1. In discussion
 - 2. In writing
 - 3. In detail
 - 4. In brief

Question ID : 9895803692
Chosen Option : 2

Q.1
5 Select the most appropriate word to fill in the blank.

I make friends _____ I go.

- Ans
- 1. moreover
 - 2. wherever
 - 3. however
 - 4. whenever

Question ID : 9895803679
Chosen Option : 4

Q.1
6 Select the synonym of the given word.

APPARENT

- Ans
- 1. Considerable
 - 2. Doubtful
 - 3. Obvious
 - 4. Questionable

Question ID : 9895803690
Chosen Option : 1

Q.1
7 From the given options, identify the segment in the sentence which contains the grammatical error.

She was known for her skills in dance and music; she is equal proficient in the allied art of painting.

- Ans
- 1. skills in dance
 - 2. allied art of painting
 - 3. was known
 - 4. is equal proficient

Question ID : 9895803673
Chosen Option : 2

Q.1
8 Select the antonym of the given word.

ABOLISH

- Ans
- 1. Build
 - 2. Affirm
 - 3. Cancel
 - 4. Finish

Question ID : 9895803688
Chosen Option : 1

Q.1
9 From the given options, identify the segment in the sentence which contains the grammatical error.

The population of Sri Lanka are less than that of India.

- Ans
- 1. than that
 - 2. Sri Lanka are
 - 3. of India
 - 4. The population

Question ID : 9895803674
Chosen Option : 2

Q.2
0 Select the correctly spelt word.

- Ans
- 1. Millennium

- 2. Millenium
- 3. Millenniumm
- 4. Millennium

Question ID : 9895803696
Chosen Option : 3

Q.2 Select the most appropriate option to substitute the underlined segment in the given sentence. If there is no need to substitute it, select No Improvement.

1

The football coach urged the team were give its best to the final match.

- Ans
- 1. No Improvement.
 - 2. That it give its best
 - 3. Try to give it best
 - 4. To give its best

Question ID : 9895803676
Chosen Option : 2

Q.2 Select the synonym of the given word.

2

CURATIVE

- Ans
- 1. Trembling
 - 2. Damaging
 - 3. Feeding
 - 4. Healing

Question ID : 9895803691
Chosen Option : 3

Q.2 Select the most appropriate option to substitute the underlined segment in the given sentence. If there is no need to substitute it, select No Improvement.

3

She give me everything I asked for.

- Ans
- 1. Is giving me everything
 - 2. gave me everything
 - 3. No Improvement
 - 4. gave myself everything

Question ID : 9895803677
Chosen Option : 1

Q.2 Select the most appropriate option to substitute the underlined segment in the given sentence. If there is no need to substitute it, select No Improvement.

4

A Study has shown that the use of mobile data in India have increased 50 times over the last three years

- Ans
- 1. No improvement
 - 2. has increased 50 times

3. Has been increased to 50 times
 4. Is increasing 50 times

Question ID : 9895803675
Chosen Option : 3

Q.2 Select the option that means the same as the given idiom.

To keep an eye on

- Ans 1. To keep a watch
 2. To be cautious
 3. To follow
 4. To stare

Question ID : 9895803693
Chosen Option : 2

Section : Hindi Language

Q.1 दिए गए शब्द का विलोम चुनें।

उत्थान

- Ans 1. गमन
 2. जड़
 3. चलन
 4. पतन

Question ID : 9895803456
Chosen Option : --

Q.2 दिये गये वाक्यांश के लिए एक शब्द चुनिए।

रात में घूमने वाला

- Ans 1. दिनचर
 2. निशाचर
 3. शनिचर
 4. खगचर

Question ID : 9895803463
Chosen Option : --

Q.3 सही वर्तनी वाले शब्द का चयन करें।

Ans

- 1. सर्वभक्षी
- 2. सरवभक्षी
- 3. सरवभक्षी
- 4. सर्वभक्षी

Question ID : 9895803464
Chosen Option : --

Q.4 दिए गए वाक्य का वह भाग ज्ञात करें जिसमें कोई त्रुटि है।

आत्मसम्मानी व्यक्ति का हृदय में लोभ का भाव नहीं होता।

- Ans
- 1. नहीं होता।
 - 2. आत्मसम्मानी व्यक्ति का
 - 3. हृदय में
 - 4. लोभ का भाव

Question ID : 9895803441
Chosen Option : --

Q.5 रिक्त स्थान को भरने के लिए सबसे उपयुक्त शब्द का चयन करें।

सूर्य उदय के _____ में भी जाग जाता हूँ।

- Ans
- 1. अंदर बाहर
 - 2. आगे पीछे
 - 3. ऊपर नीचे
 - 4. साथ

Question ID : 9895803446
Chosen Option : --

Comprehension:

दिए गए अनुच्छेद में कुछ शब्द हटा दिए गए हैं। दिए गए विकल्पों की सहायता से रिक्त स्थान भरें। प्रत्येक संख्या के लिए सबसे उपयुक्त विकल्प का चयन करें।

भाग्य परिवर्तन के लिए _____(1) ही एकमात्र सहारा है। केवल इच्छाओं द्वारा वांछित फल की _____(2) असंभव है। यदि व्यक्ति दिन में सपने देखता रहे, समुद्र के किनारे _____(3) धरकर बैठा रहे तो कोई लाभ न होगा। परिश्रमी व्यक्ति ही गोता लगाकर अतुल संपत्ति पा सकता है। परिश्रम ही _____(4) की कुंजी है। यह मनुष्य को स्वावलंबी व _____(5) बनाती है।

SubQuestion No : 6

Q.6 गद्यांश में संकेतित रिक्त स्थान (1) के लिए उपयुक्त शब्द होगा -

- Ans
- 1. परिश्रम
 - 2. आलस
 - 3. नींद
 - 4. खाना

Question ID : 9895803451
Chosen Option : --

Comprehension:

दिए गए अनुच्छेद में कुछ शब्द हटा दिए गए हैं। दिए गए विकल्पों की सहायता से रिक्त स्थान भरें। प्रत्येक संख्या के लिए सबसे उपयुक्त विकल्प का चयन करें।

भाग्य परिवर्तन के लिए _____(1) ही एकमात्र सहारा है। केवल इच्छाओं द्वारा वांछित फल की _____(2) असंभव है। यदि व्यक्ति दिन में सपने देखता रहे, समुद्र के किनारे _____(3) धरकर बैठा रहे तो कोई लाभ न होगा। परिश्रमी व्यक्ति ही गोता लगाकर अतुल संपत्ति पा सकता है। परिश्रम ही _____(4) की कुंजी है। यह मनुष्य को स्वावलंबी व _____(5) बनाती है।

SubQuestion No : 7

Q.7 गद्यांश में संकेतित रिक्त स्थान (2) के लिए उपयुक्त शब्द होगा -

- Ans
- 1. लेख
 - 2. प्राप्ति
 - 3. मौका
 - 4. गति

Question ID : 9895803452

Chosen Option : --

Comprehension:

दिए गए अनुच्छेद में कुछ शब्द हटा दिए गए हैं। दिए गए विकल्पों की सहायता से रिक्त स्थान भरें। प्रत्येक संख्या के लिए सबसे उपयुक्त विकल्प का चयन करें।

भाग्य परिवर्तन के लिए _____ (1) ही एकमात्र सहारा है। केवल इच्छाओं द्वारा वांछित फल की _____ (2) असंभव है। यदि व्यक्ति दिन में सपने देखता रहे, समुद्र के किनारे _____ (3) धरकर बैठा रहे तो कोई लाभ न होगा। परिश्रमी व्यक्ति ही गोता लगाकर अतुल संपत्ति पा सकता है। परिश्रम ही _____ (4) की कुंजी है। यह मनुष्य को स्वावलंबी व _____ (5) बनाती है।

SubQuestion No : 8

Q.8 गद्यांश में संकेतित रिक्त स्थान (3) के लिए उपयुक्त शब्द होगा -

- Ans
- 1. पैर पर पैर
 - 2. हाथ पर हाथ
 - 3. मुँह पर मुँह
 - 4. आँख पर आँख

Question ID : 9895803453

Chosen Option : --

Comprehension:

दिए गए अनुच्छेद में कुछ शब्द हटा दिए गए हैं। दिए गए विकल्पों की सहायता से रिक्त स्थान भरें। प्रत्येक संख्या के लिए सबसे उपयुक्त विकल्प का चयन करें।

भाग्य परिवर्तन के लिए _____ (1) ही एकमात्र सहारा है। केवल इच्छाओं द्वारा वांछित फल की _____ (2) असंभव है। यदि व्यक्ति दिन में सपने देखता रहे, समुद्र के किनारे _____ (3) धरकर बैठा रहे तो कोई लाभ न होगा। परिश्रमी व्यक्ति ही गोता लगाकर अतुल संपत्ति पा सकता है। परिश्रम ही _____ (4) की कुंजी है। यह मनुष्य को स्वावलंबी व _____ (5) बनाती है।

SubQuestion No : 9

Q.9 गद्यांश में संकेतित रिक्त स्थान (4) के लिए उपयुक्त शब्द होगा -

- Ans
- 1. विफलता
 - 2. प्रसन्नता
 - 3. भाग्य

✗ 4. सफलता

Question ID : 9895803454
Chosen Option : --

Comprehension:

दिए गए अनुच्छेद में कुछ शब्द हटा दिए गए हैं। दिए गए विकल्पों की सहायता से रिक्त स्थान भरें। प्रत्येक संख्या के लिए सबसे उपयुक्त विकल्प का चयन करें।

भाग्य परिवर्तन के लिए _____(1) ही एकमात्र सहारा है। केवल इच्छाओं द्वारा वांछित फल की _____(2) असंभव है। यदि व्यक्ति दिन में सपने देखता रहे, समुद्र के किनारे _____(3) धरकर बैठा रहे तो कोई लाभ न होगा। परिश्रमी व्यक्ति ही गोता लगाकर अतुल संपत्ति पा सकता है। परिश्रम ही _____(4) की कुंजी है। यह मनुष्य को स्वावलंबी व _____(5) बनाती है।

SubQuestion No : 10

Q.1
0 गद्यांश में संकेतित रिक्त स्थान (5) के लिए उपयुक्त शब्द होगा -

- Ans
- ✗ 1. सुस्त
 - ✓ 2. उपेक्षित
 - ✗ 3. आलसी
 - ✗ 4. स्वाभिमानी

Question ID : 9895803455
Chosen Option : --

Q.1
1 दिए गए शब्द के पर्यायवाची शब्द का चयन करें।

आगंतुक

- Ans
- ✓ 1. अतिथि
 - ✗ 2. अनोखा
 - ✗ 3. अनुचर
 - ✗ 4. आत्मज

Question ID : 9895803459
Chosen Option : --

Q.1
2

रिक्त स्थान को भरने के लिए सबसे उपयुक्त शब्द का चयन करें।

घोड़ा _____ रहा है।

- Ans
- 1. हिनहिना
 - 2. कूक
 - 3. मिमिया
 - 4. भौंक

Question ID : 9895803449
Chosen Option : --

Q.1
3 दिए गए शब्द का विलोम चुनें।

निर्माण

- Ans
- 1. अहित
 - 2. कोमल
 - 3. निश्चित
 - 4. ध्वंस

Question ID : 9895803457
Chosen Option : --

Q.1
4 दिए गए शब्द के पर्यायवाची शब्द का चयन करें।

बिजली

- Ans
- 1. वात
 - 2. दामिनी
 - 3. रिपु
 - 4. व्याध्र

Question ID : 9895803458
Chosen Option : --

Q.1
5 दिए गए वाक्य में रेखांकित खंड को प्रतिस्थापित करने के लिए सबसे उपयुक्त विकल्प का चयन करें।

यात्रा का प्रबन्ध शीघ्रता में हुआ था, अतः न तो उनके पास पर्याप्त वस्त्र थी और न ही धन का पूरा प्रबन्ध।

- Ans
- 1.

न तो उनके पास पर्याप्त वस्त्र थी और न ही धन को पूरा प्रबंध।

✗ 2.

न तो उनके पास पर्याप्त वस्त्र थे, और न ही धन का पूरा प्रबंध।

✗ 3.

न तो उनके पास पर्याप्त वस्त्र थे, और न ही धन की पूरा प्रबंध।

✗ 4.

न तो उनके पास पर्याप्त वस्त्र थे, और नही धन को पूरा प्रबंध।

Question ID : 9895803444

Chosen Option : --

Q.1 निम्नलिखित में से उस विकल्प का चयन करें जो 'अँगूठा दिखाना' मुहावरे का अर्थ व्यक्त करता है।

Ans ✗ 1. मौके पर मना कर देना

✗ 2. हँसना

✗ 3. चिढ़ाना

✓ 4. अँगूठा दिखाकर हँसी उड़ाना

Question ID : 9895803460

Chosen Option : --

Q.1 दिए गए वाक्य में रेखांकित खंड को प्रतिस्थापित करने के लिए सबसे उपयुक्त विकल्प का चयन करें।

छात्र जब परिश्रम के मार्ग पर चलता है, तो उसे सफलता व संतुष्टि का फल मिलती है।

Ans ✗ 1. फलों मिलना है।

✗ 2. फल मिलती हैं।

✗ 3. फल मिलता है।

✓ 4. फल मिलते हैं।

Question ID : 9895803443

Chosen Option : --

Q.1 दिए गए वाक्य का वह भाग ज्ञात करें जिसमें कोई त्रुटि है।

इतने वर्षों की उपरांत मिलने पर हम बहुत खुश हुए।

Ans ✗ 1. हम बहुत

✗ 2. खुश हुए।

✓ 3. इतने वर्षों की उपरांत

✗ 4. मिलने पर

Question ID : 9895803442

Chosen Option : --

Q.1 रिक्त स्थान को भरने के लिए सबसे उपयुक्त शब्द का चयन करें।

_____ बारिश हो रही है।

Ans ✗ 1. रिमझिम

✓ 2. सिमसिम

✗ 3. खड़खड़

✗ 4. कलकल

Question ID : 9895803447

Chosen Option : --

Q.2 निम्नलिखित में से उस विकल्प का चयन करें जो 'अपने मुँह मियाँ मिठू बनना' मुहावरे का अर्थ व्यक्त करता है।

Ans ✗ 1. अपनी प्रशंसा स्वयं करना

✓ 2. अपने मुँह से मिठू पकड़ना

✗ 3. दूसरों की प्रशंसा करना

✗ 4. अपनी प्रशंसा दूसरों से सुनना

Question ID : 9895803461

Chosen Option : --

Q.2 सही वर्तनी वाले शब्द का चयन करें।

Ans ✗ 1. आजनम

✓ 2. अजम्ना

✗ 3. अजनम

✗ 4. अजन्मा

Question ID : 9895803465

Chosen Option : --

Q.2 दिए गए वाक्य का वह भाग ज्ञात करें जिसमें कोई त्रुटि है।

युवक ही किसी देश को शक्ति का आधार होते हैं।

- Ans
- 1. आधार होते हैं।
 - 2. शक्ति का
 - 3. युवक ही
 - 4. किसी देश को

Question ID : 9895803440

Chosen Option : --

Q.2
3 दिए गए वाक्य में रेखांकित खंड को प्रतिस्थापित करने के लिए सबसे उपयुक्त विकल्प का चयन करें।

आज सुबह से बारिश हो रही है और बच्चा बारिश में नहा रहा है।

- Ans
- 1. बच्चा बारिश में नहा रहा है।
 - 2. बच्चों बारिश में नहा रही है।
 - 3. बच्चे बारिशों में नहा रहा है।
 - 4. बच्चा बारिश में नहा रही है।

Question ID : 9895803445

Chosen Option : --

Q.2
4 रिक्त स्थान को भरने के लिए सबसे उपयुक्त शब्द का चयन करें।

आज प्रत्येक गाँव में _____ खोले जा रहे हैं।

- Ans
- 1. बंदरगाह
 - 2. विश्वविद्यालय
 - 3. हवाई अड्डे
 - 4. विद्यालय

Question ID : 9895803448

Chosen Option : --

Q.2
5 दिये गये वाक्यांश के लिए एक शब्द चुनिए।

जो देखने योग्य हो

- Ans
- 1. दर्शनीय
 - 2. शोभनीय

✓ 3. प्रशंसनीय

✗ 4. रमणीय

Question ID : 9895803462
Chosen Option : --

www.exammix.com